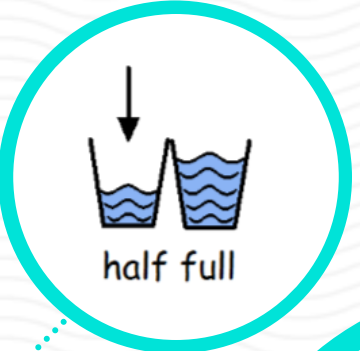
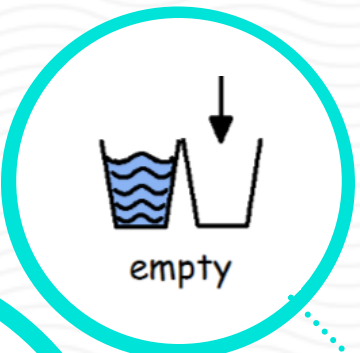




Give your child 3 containers with water in. Make sure the containers are the same size.
Can they identify:
full
empty
half-full


Use the symbols to support



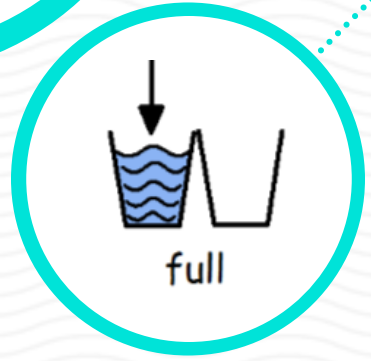
Derwent Capacity Investigations



Choose 3 containers. Take a cup or a yoghurt pot and find out how many scoops it takes to fill each container. Line your containers up in order from smallest to largest.



Choose some different containers. Does the tallest container always hold the most water? Why? Why not?



Can you fill some cups so one is half full, one is less than half full and the other is full?

